






1

Complète.

 <p>$5 + 5 + 5 = 15$ $5 \times 3 = 3 \times 5 = 15$</p>	 <p>___ + ___ = ___ ___ x ___ = ___</p>	 <p>___ + ___ + ___ + ___ = ___ ___ x ___ = ___ x ___ = ___</p>
 <p>___ + ___ + ___ + ___ = ___ ___ x ___ = ___ x ___ = ___</p>	 <p>___ + ___ + ___ = ___ ___ x ___ = ___ x ___ = ___</p>	

2

Pose en colonnes et calcule les additions (sur la feuille de couleur).

$125 + 9 + 88 = \underline{\quad}$

$398 + 75 + 8 = \underline{\quad}$

$4 + 194 + 21 = \underline{\quad}$

$5 + 29 + 878 = \underline{\quad}$

$12 + 324 + 7 = \underline{\quad}$

$62 + 1 + 736 = \underline{\quad}$